
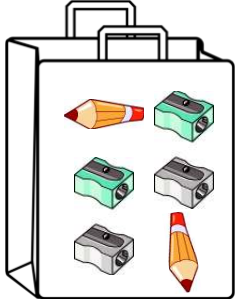
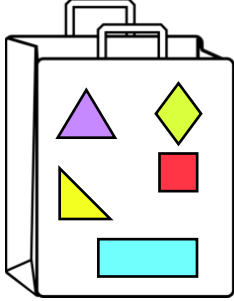

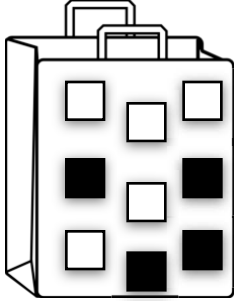
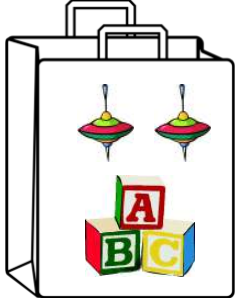


POSSIBLE OR IMPOSSIBLE

Circle possible or impossible to predict each event.

<p>1. Pulling an apple out of this bag is _____.</p> <p>Possible</p> <p>Impossible</p> 	<p>2. Pulling an eraser out of this bag is _____.</p> <p>Possible</p> <p>Impossible</p> 
<p>3. Pulling a quadrilateral out of this bag is _____.</p> <p>Possible</p> <p>Impossible</p> 	<p>4. Pulling a beach ball out of this bag is _____.</p> <p>Possible</p> <p>Impossible</p> 
<p>5. Pulling a gray tile out of this bag is _____.</p> <p>Possible</p> <p>Impossible</p> 	<p>6. Pulling a top out of this bag is _____.</p> <p>Possible</p> <p>Impossible</p> 

7. A dog will fly past the window.

Possible

Impossible

8. There will be a rainbow after the rain.

Possible

Impossible

9. If I throw a regular dice, I will get a number greater than 10.


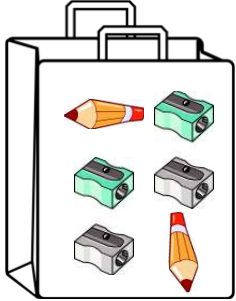
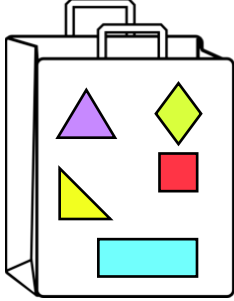

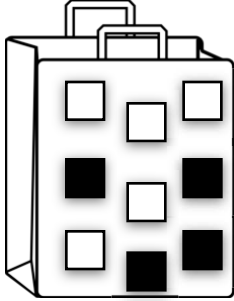
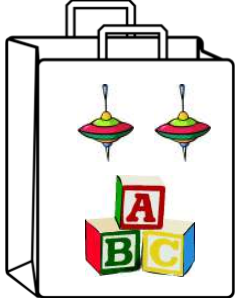
Possible

Impossible

POSSIBLE OR IMPOSSIBLE

Circle possible or impossible to predict each event.

Answer Key

<p>1. Pulling an apple out of this bag is _____.</p> <p>Possible</p> <p>Impossible</p> 	<p>2. Pulling an eraser out of this bag is _____.</p> <p>Possible</p> <p>Impossible</p> 
<p>3. Pulling a quadrilateral out of this bag is _____.</p> <p>Possible</p> <p>Impossible</p> 	<p>4. Pulling a beach ball out of this bag is _____.</p> <p>Possible</p> <p>Impossible</p> 
<p>5. Pulling a gray tile out of this bag is _____.</p> <p>Possible</p> <p>Impossible</p> 	<p>6. Pulling a top out of this bag is _____.</p> <p>Possible</p> <p>Impossible</p> 

7. A dog will fly past the window.

Possible

Impossible

8. There will be a rainbow after the rain.

Possible

Impossible

9. If I throw a regular dice, I will get a number greater than 10.

Possible

Impossible