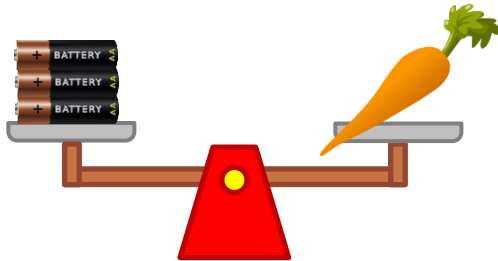
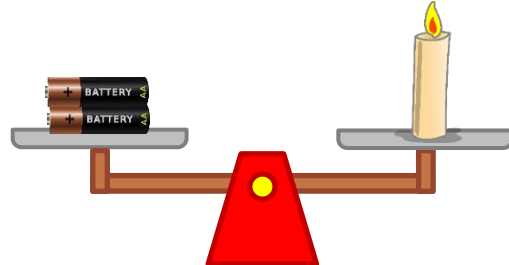


Measure weights in non-standard units

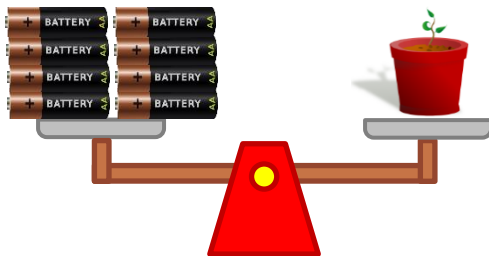
Grade 2 Measurement Worksheet



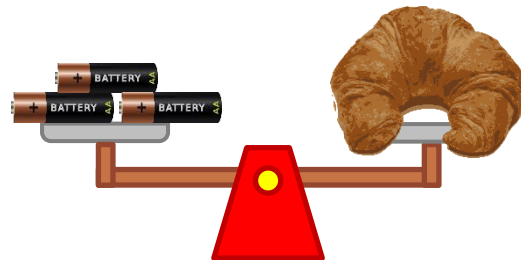
The weight of the carrot in batteries is _____.



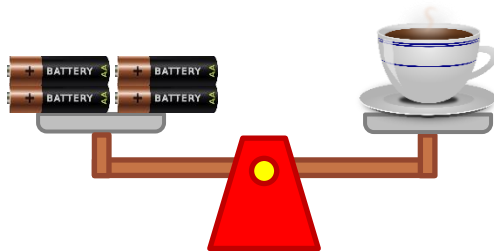
The weight of the candle in batteries is _____.



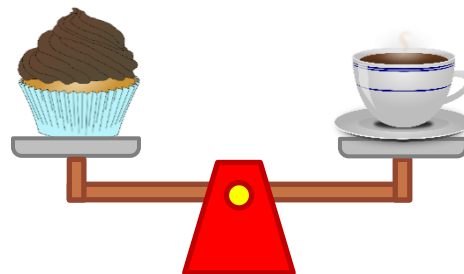
The weight of the plant in batteries is _____.



The weight of the croissant in batteries is _____.



The weight of the coffee in batteries is _____.



The weight of the coffee in cupcakes is _____.

Which object is the heaviest?

Which one is heavier: cupcake or croissant?

Answers

The weight of the carrot in batteries is **3 batteries**.

The weight of the candle in batteries is **2 batteries**.

The weight of the plant in batteries is **8 batteries**.

The weight of the croissant in batteries is **3 batteries**.

The weight of the coffee in batteries is **4 batteries**.

The weight of the coffee in cupcakes is **1 batteries**.

Which object is the heaviest?

The plant is the heaviest.

Which one is heavier: cupcake or croissant?

Cupcake