

Capacity: More or less than 1 liter?



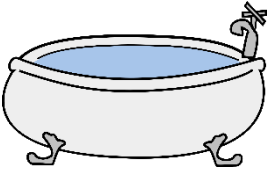




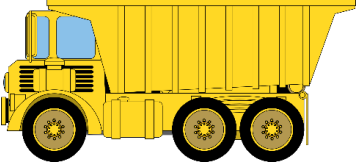
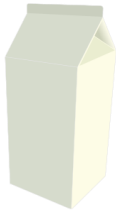
Grade 2 Measurement Worksheet

Does it hold more or less than 1 liter? Circle the correct answer.

Hint: 1 liter = 1000 mL

<p>A coffee cup</p> 	<p>A spoon</p> 	<p>A bathtub</p> 
<p>Less than / More than</p>	<p>Less than / More than</p>	<p>Less than / More than</p>
<p>A tube of sunscreen</p> 	<p>A mug</p> 	<p>A yogurt cup</p> 
<p>Less than / More than</p>	<p>Less than / More than</p>	<p>Less than / More than</p>
<p>Juice box</p> 	<p>Dump truck</p> 	<p>Milk carton</p> 
<p>Less than / More than</p>	<p>Less than / More than</p>	<p>Less than / More than</p>

Answers

<p>A coffee cup</p> 	<p>A spoon</p> 	<p>A bathtub</p> 
<p>Less than</p>	<p>Less than</p>	<p>More than</p>
<p>A tube of sunscreen</p> 	<p>A mug</p> 	<p>A yogurt cup</p> 
<p>Less than</p>	<p>Less than</p>	<p>Less than</p>
<p>Juice box</p> 	<p>Dump truck</p> 	<p>Milk carton</p> 
<p>Less than</p>	<p>More than</p>	<p>More than</p>